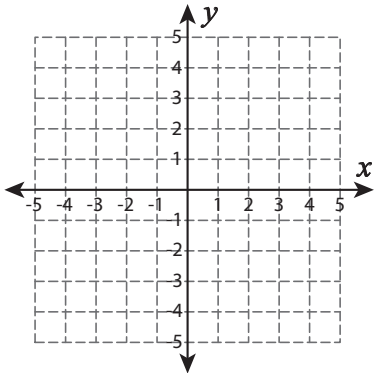


Types of Slopes

Question:

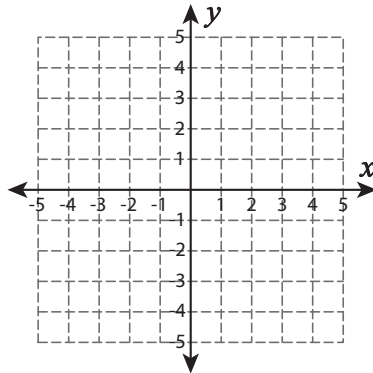
A) Draw a line through the given coordinates and identify the types of slopes.

1) (5, 1) and (2, 4)



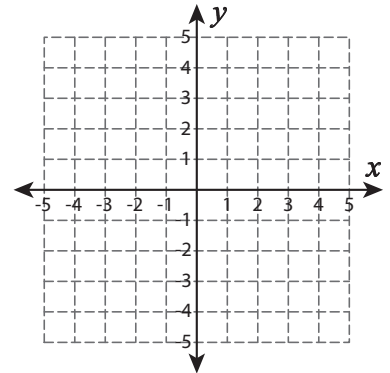
Ans:

2) (-2, 3) and (-2, -5)



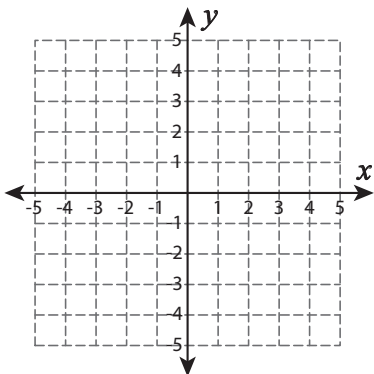
Ans:

3) (-1, 2) and (-4, 0)



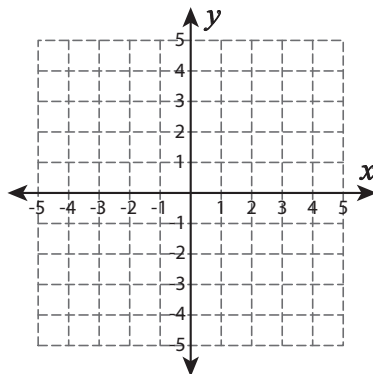
Ans:

4) (-4, -2) and (1, 2)



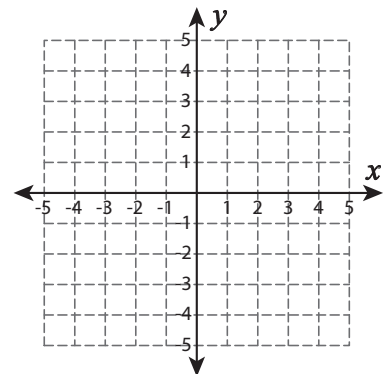
Ans:

5) (0, 5) and (4, 1)



Ans:

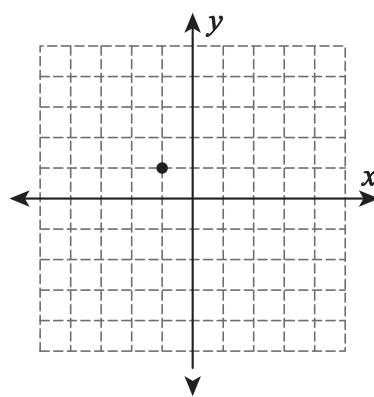
6) (-3, -4) and (5, -4)



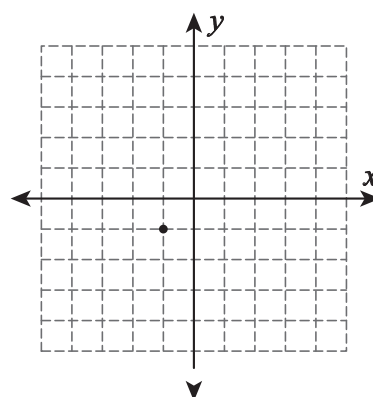
Ans:

B) Draw a line through the point for the given type of slope.

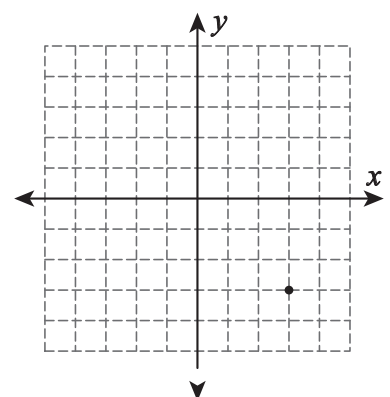
1) Positive slope



2) Zero slope



3) Negative slope

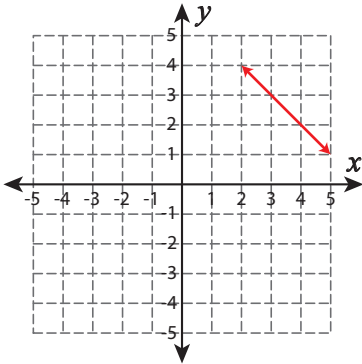


Types of Slopes

Question:

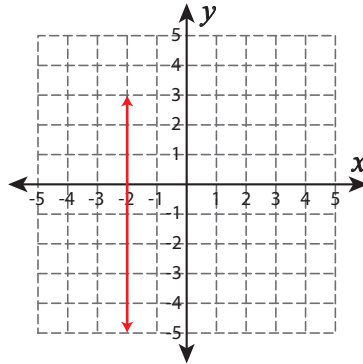
A) Draw a line through the given coordinates and identify the types of slopes.

1) (5, 1) and (2, 4)



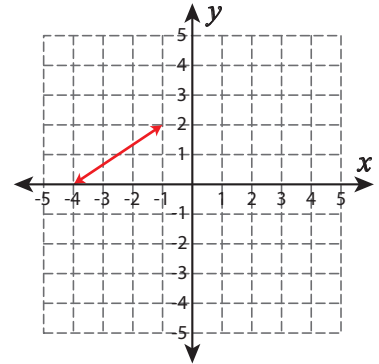
Ans: Negative Slope

2) (-2, 3) and (-2, -5)



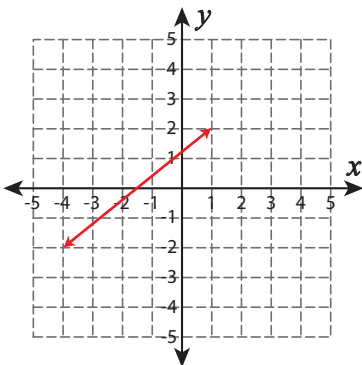
Ans: Undefined Slope

3) (-1, 2) and (-4, 0)



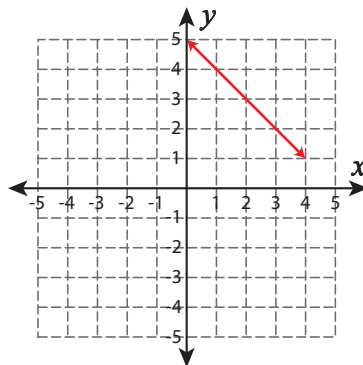
Ans: Positive Slope

4) (-4, -2) and (1, 2)



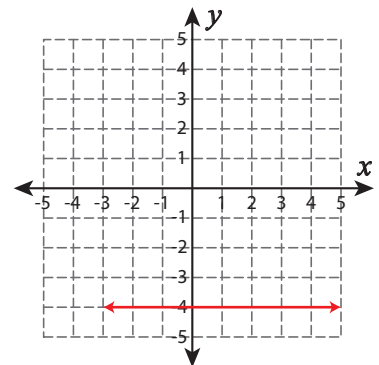
Ans: Positive Slope

5) (0, 5) and (4, 1)



Ans: Negative Slope

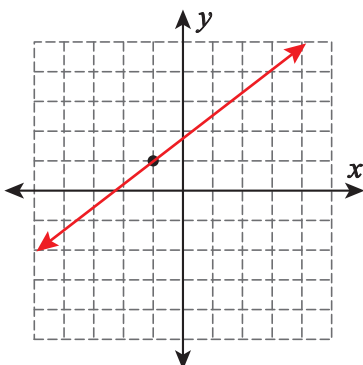
6) (-3, -4) and (5, -4)



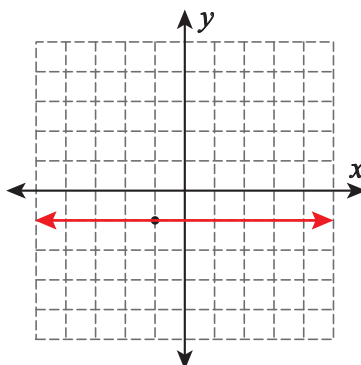
Ans: Zero Slope

B) Draw a line through the point for the given type of slope.

1) Positive slope



2) Zero slope



3) Negative slope

