

Name : _____

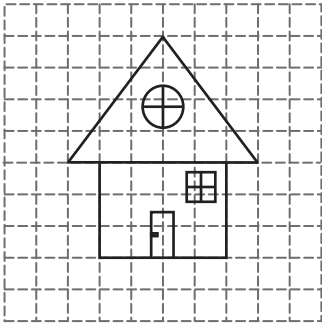
Date : _____

Graphing

Question:


Find the slope of each roof. (The slope should be positive)

1)




Ans:

2)




Ans:

3)



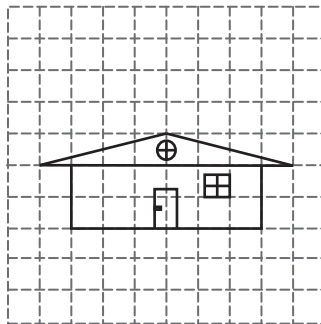
Ans:

4)




Ans:

5)



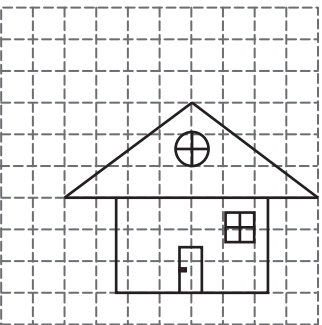
Ans:

6)




Ans:

7)



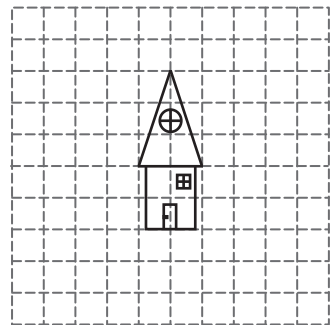
Ans:

8)



Ans:

9)



Ans:

Name : _____

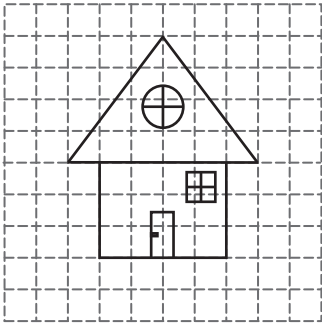
Date : _____

Graphing

Question:


Find the slope of each roof. (The slope should be positive)

1)




Ans: $\frac{4}{3}$

2)




Ans: $\frac{2}{5}$

3)



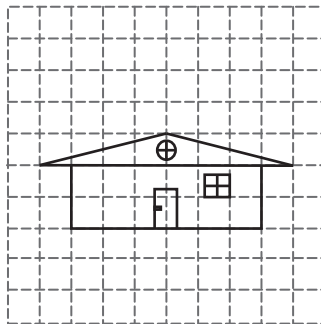
Ans: $\frac{3}{2}$

4)




Ans: 1

5)



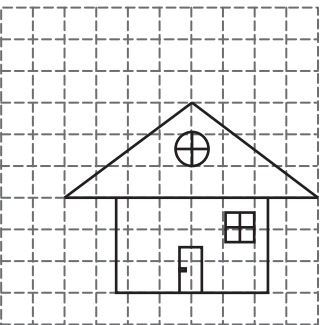
Ans: $\frac{1}{4}$

6)




Ans: $\frac{4}{5}$

7)



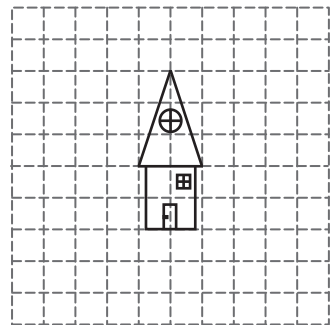
Ans: $\frac{3}{4}$

8)



Ans: $\frac{5}{3}$

9)



Ans: 3